


BÀI 1: CÁC SỐ 1, 2, 3, 4, 5


1. Khoanh vào số thích hợp (theo mẫu):




1 2 3




1 2 3




3 4 5



2 3 4



3 4 5



1 2 3

2. Nối số tương ứng (theo mẫu):



1




2



3




4




5

BÀI 1: Các số 1, 2, 3, 4, 5

3. Điền số tương ứng:



4. Quan sát tranh và điền số tương ứng:




BÀI 1: CÁC SỐ 1, 2, 3, 4, 5


1. Khoanh vào số thích hợp (theo mẫu):




1 2 **3**




1 **2** 3




3 **4** 5



2 3 **4**

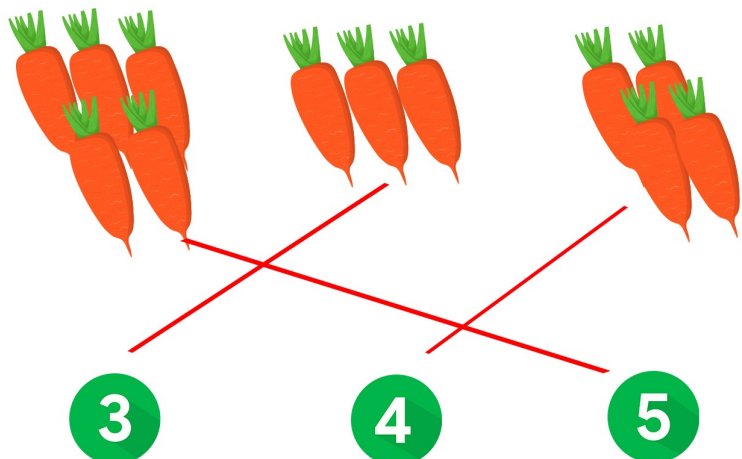
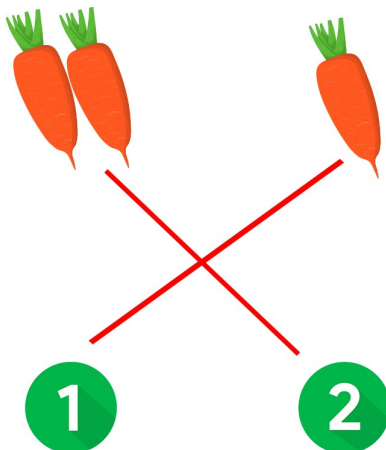


3 4 **5**



1 **2** 3

2. Nối số tương ứng (theo mẫu):



BÀI 1: Các số 1, 2, 3, 4, 5

3. Điền số tương ứng:



2




1



5



3



2



4

4. Quan sát tranh và điền số tương ứng:



4



5



4



1

